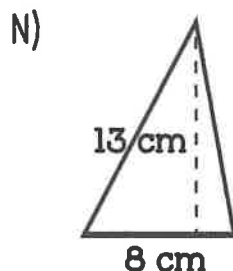
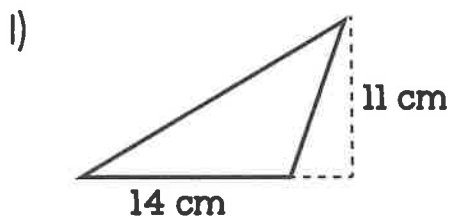
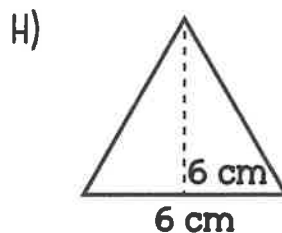
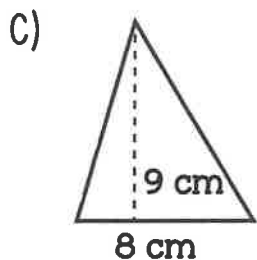
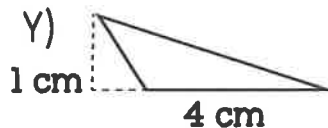
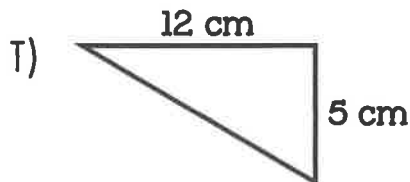
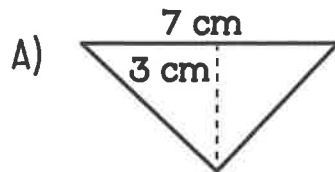
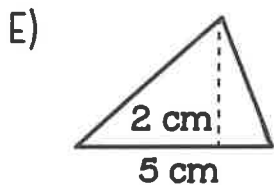


Area of Triangles

Find the area of each triangle to solve the riddle.



Why don't alligators like fast food?

- | | | | | | | | |
|--------------------|----------------------|--------------------|--------------------|--------------------|----------------------|--------------------|--------------------|
| _____ | _____ | _____ | _____ | _____ | _____ | _____ | _____ |
| 30 cm ² | 18 cm ² | 5 cm ² | 2 cm ² | 36 cm ² | 10.5 cm ² | 52 cm ² | 30 cm ² |
| _____ | _____ | _____ | _____ | _____ | _____ | _____ | _____ |
| 36 cm ² | 10.5 cm ² | 30 cm ² | 36 cm ² | 18 cm ² | 77 cm ² | 30 cm ² | _____ |