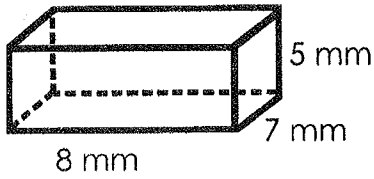


Name: _____

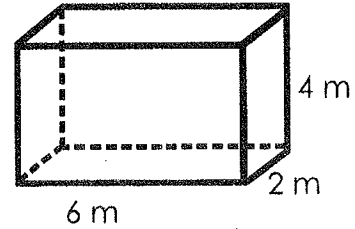
Date: _____

SURFACE AREA OF RECTANGULAR PRISMS COLOR & SOLVE

#1 Find the surface area of the figure below:



#2 Find the surface area of the figure below



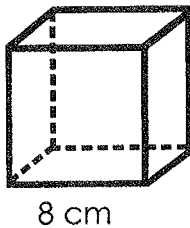
If the answer is **262 mm²**, color the 1's **red**.

If the answer is **280 mm²**, color the 1's **purple**.

If the answer is **48 m²**, color the 2's **blue**.

If the answer is **88 m²**, color the 2's **orange**.

#3 Find the surface area of the figure below:



#4 Find the surface area of a rectangular prism with a length of 12 cm, a height of 8 cm and a width of 2 cm.

If the answer is **64 cm²**, color the 3's **green**.

If the answer is **384 cm²**, color the 3's **yellow**.

If the answer is **272 cm²**, color the 4's **green**.

If the answer is **22 cm²**, color the 4's **pink**.

#5 Find the surface area of a rectangular prism with a length of 20 m, a height of 1 m and a width of 22 m.

#6 Find the surface area of a rectangular prism with a length of 1.2 feet, a height of 3 feet and a width of 5 feet.

If the answer is **964 m²**, color the 5's **blue**.

If the answer is **43 m²**, color the 5's **purple**.

If the answer is **18 ft²**, color the 6's **red**.

If the answer is **49.2 ft²**, color the 6's **purple**.

Name: _____

Date: _____

SURFACE AREA OF RECTANGULAR PRISMS COLOR & SOLVE

